



Q1. Fill in the blanks:

- The hour hand takes ____ hours to complete 1 round.
- There are _____ hours in a day.
- The minute hand takes ____ hour to complete 1 round.
- The minute hand moves through _____ minutes from every number to the next.

Q2. Match the clock with the time:

	Quarter past 4
	Quarter to 5
	Quarter to 4

Q3. Ashu came home late at night. Look at the clock and tell at what time Ashu reached home.








Answer: _____




Q4. Following is Anju's daily routine. Fill in the blanks with a.m. or p.m.

Wakes up	6:00 ____
Goes to school	7:30 ____
Returns from school	2:30 ____
Starts homework	4:30 ____
Goes to bed	10:00 ____.

Match the clock with Anju's daily routine as per the information given above:

Wakes up	
Goes to school	
Returns from school	
Start homework	
Goes to bed	

Q5 Write the time for the following clocks:



__ : __



b.



__:__

Q6. Choose the correct option:

Shreya eats breakfast at:

(i)



(ii)



(iii)



Q7. Write the time in the shorter format in the table:

Time	Shorter format
10 minutes past 12	__:__
7 o' clock	__:__
30 minutes past 4	__:__
10 minutes to 5	__:__

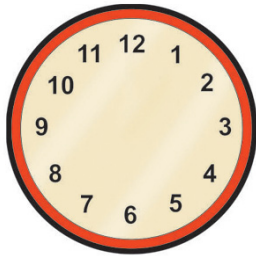
Q8. Match the time:

10 minutes to 4	30 minutes past 6
25 minutes to 2	35 minutes past 1
Half past 6	20 minutes past 6
40 minutes to 7	50 minutes past 3

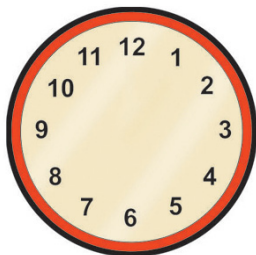


Q9. Draw the hands of the clock to show the following time:

a. 25 minutes past 4



b. 10 minutes to 7



Q10. Fill in the blanks:

- a. 5 hours = _____ minutes
- b. 6 years = _____ months
- c. 2 days = _____ hours
- d. 6 decades = _____ years

Q11. Convert the times and complete the table:

12-hour clock time	24-hour clock time
10:30 a.m.	__:__
__:__	09:30
4:25 p.m.	__:__
__:__	17:10

Q12. Kirti's school bus didn't come on time. She usually arrives by 15:05 but today she reached home at 15:30 hours. Write the time when Kirti reached home today in the 12-hour format.

Answer: _____



Q13. Smita takes 1 hour 15 minutes to bake a cake while her mother takes 65 minutes. Who takes longer to bake a cake?

Answer: _____

Q14. Dr. Jatin came to hospital at 8 o'clock in the morning. Till 10 minutes to 9 he was in the hospital and then he left for a conference.

Based on above information, write the time for the following in 12 hour format:

Dr. Jatin reached hospital at: ____:____ ____

Dr. Jatin left hospital at: ____:____ ____

Q15. Shamit watched T.V. from 5:30p.m. to 6:45p.m. How long did he watch T.V?



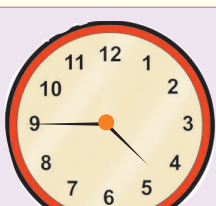
Answer: _____



ANSWERS

1. a. 12 b. 24
 c. 1 d. 5

2.

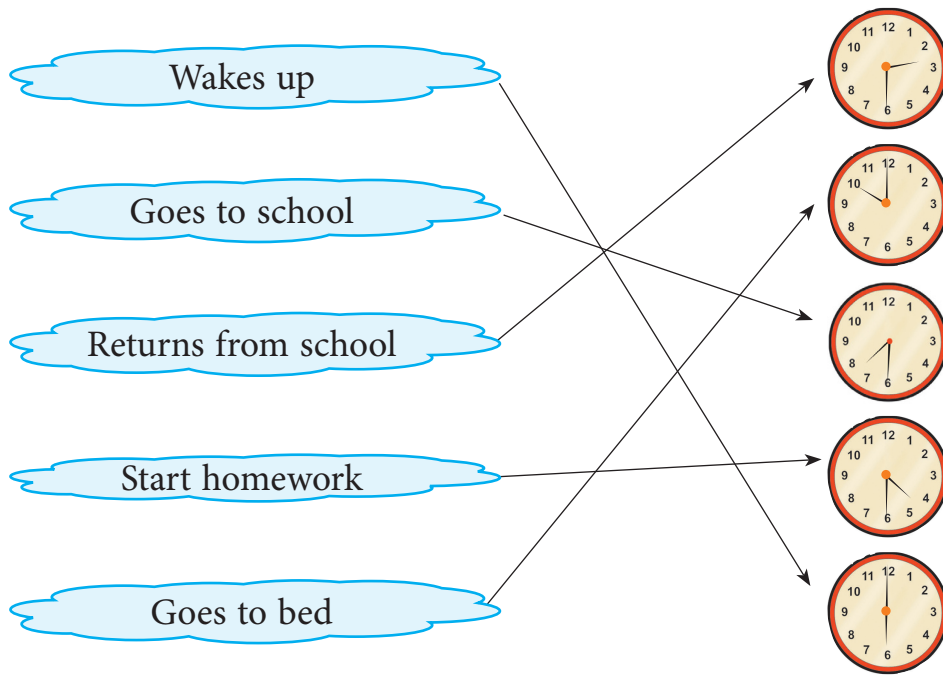
	Quarter to 4
	Quarter past 4
	Quarter to 5

3. 11 o' clock or 11:00 p.m.

4.

Wakes up	6:00 a.m.
Goes to school	7:30 a.m.
Returns from school	2:30 p.m.
Starts homework	4:30 p.m.
Goes to bed	10:00 p.m.





5. a. 6:10 b. 11:05

6. (ii)

7.

Time	Shorter format
10 minutes past 12	12:10
7 o'clock	7:00
30 minutes past 4	4:30
10 minutes to 5	4:50


8.

10 minutes to 4	50 minutes past 3
25 minutes to 2	35 minutes past 1
Half past 6	30 minutes past 6
40 minutes to 7	20 minutes past 6

9. a.



b.



10. a. 300
c. 48
- b. 72
d. 60

11.

12-hour clock time	24-hour clock time
10:30 a.m.	10:30
9:30 a.m.	09:30
4:25 p.m.	16:25
5:10 p.m.	17:10

12. 3:30 p.m.
13. Smita takes longer time
14. 8:00 a.m.; 8:50 a.m.
15. 1 hour 15 minutes

